



UNIVERSITY OF CAMBRIDGE INTERNATIONAL EXAMINATIONS
General Certificate of Education Ordinary Level

CANDIDATE
NAME

CENTRE
NUMBER

--	--	--	--	--

CANDIDATE
NUMBER

--	--	--	--



GEOGRAPHY

2217/02

Paper 2

October/November 2009

2 hours 15 minutes

Candidates answer on the Question Paper.

Additional Materials: Calculator
 Ruler
 Protractor
 Plain paper

1:50 000 Survey Map Extract is enclosed with this Question Paper.

READ THESE INSTRUCTIONS FIRST

Write your Centre number, candidate number and name in the spaces provided.
Write in dark blue or black pen.
You may use a soft pencil for any diagrams, graphs or rough working.
Do not use staples, paper clips, highlighters, glue or correction fluid.
DO NOT WRITE IN ANY BARCODES.

Section A

Answer **all** questions.

Section B

Answer **one** question.

Sketch maps and diagrams should be drawn whenever they serve to illustrate an answer.

The Insert contains Fig. 9 and Tables 4 and 5 for Question 7, and Table 7 for Question 8.

The Survey Map Extract and the Insert are **not** required by the Examiner.

At the end of the examination, fasten all your work securely together.

The number of marks is given in brackets [] at the end of each question or part question.

For Examiner's Use	
Section A	
Q1	
Q2	
Q3	
Q4	
Q5	
Q6	
Section B	
Q7	
Q8	
Total	

This document consists of **27** printed pages, **1** blank page and **1** Insert.



Section A

Answer **all** questions in this section.

For
Examiner's
Use

1 Study the 1:50 000 map of Glendale, Zimbabwe.

(a) (i) Identify the transport route that crosses the railway at 961797.

..... [1]

(ii) Which compass direction does the railway take from Glendale towards Concession?

..... [1]

(b) State the general direction of drainage in square 9776.

From to [1]

(c) (i) Calculate the average gradient of the road between the spot height in 9478 and the spot height in 0081.

Height difference metres [1]

Road distance metres [1]

Gradient = 1 in [1]

(ii) Why do the **actual** gradients over this stretch of road differ from the average gradient?

.....
..... [1]

(d) Fig. 1 shows a cross-section from 930820 to 930880. This is marked as line A–B on the map extract.

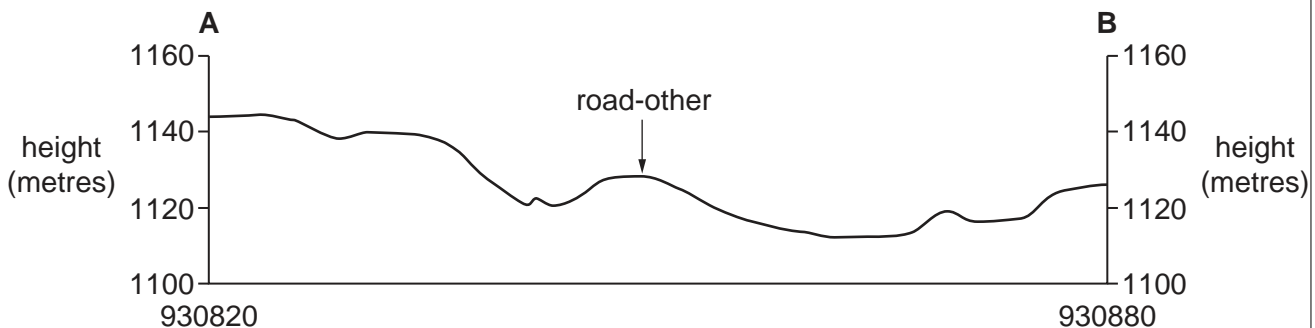


Fig. 1

(i) On Fig. 1 use labelled arrows with the correct letter to show the positions of:

- the narrow tarred road (R)
- the island in the Murowodzi River (I)
- the Mwenje River (M)

[3]

2 (a) Study Table 1 and Fig. 3, which show climate data for Jakarta, Indonesia.

Table 1

months	J	F	M	A
average temperature (°C)	26	26	26	27
rainfall (mm)	340	300	210	140

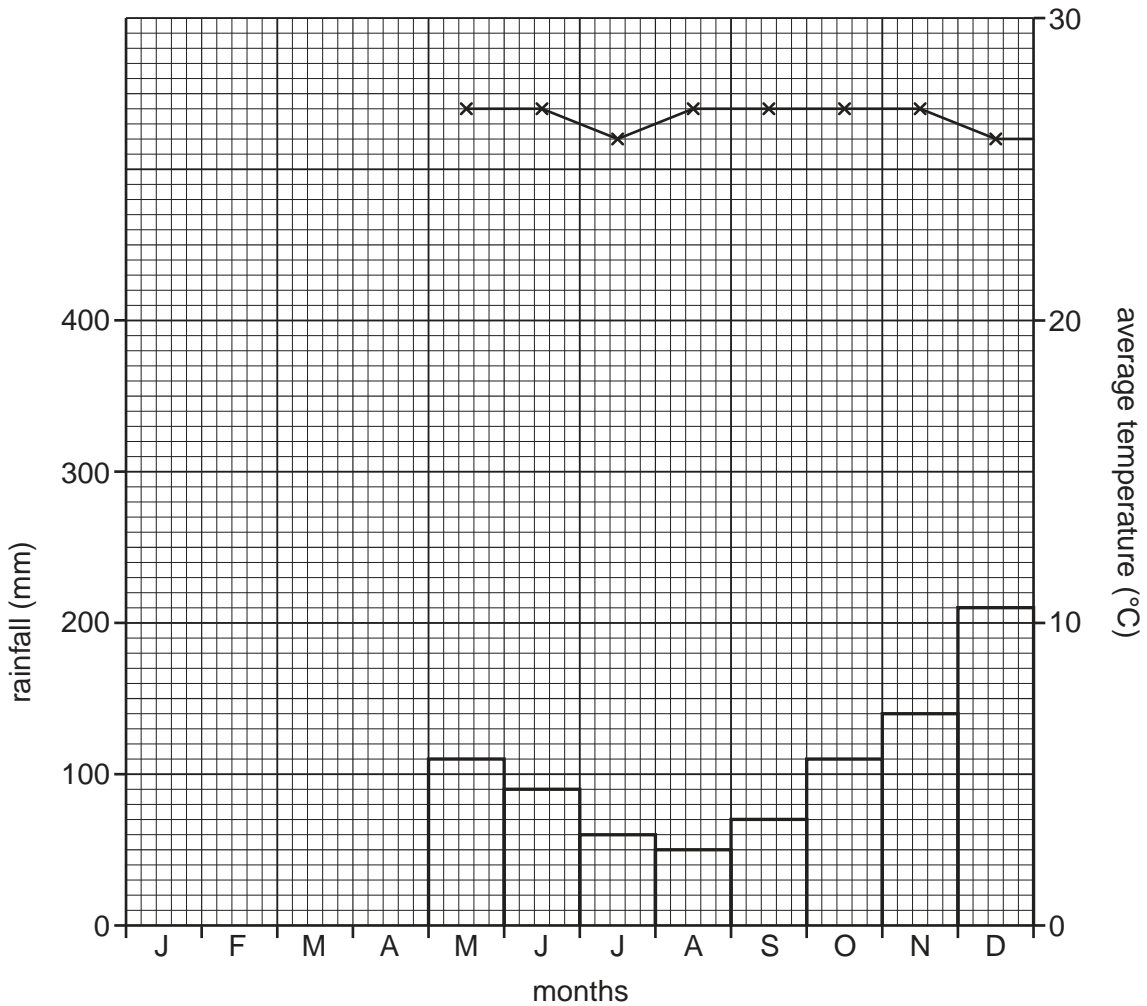


Fig. 3

(i) Use the data from Table 1 to complete the graph in Fig. 3. [2]

(ii) Calculate the annual temperature range for Jakarta.
..... [1]

(iii) From the graph, state the temperature and rainfall for September.
Temperature
Rainfall [2]

3 Study Fig. 4, which shows the use of chemical fertilisers in Africa.

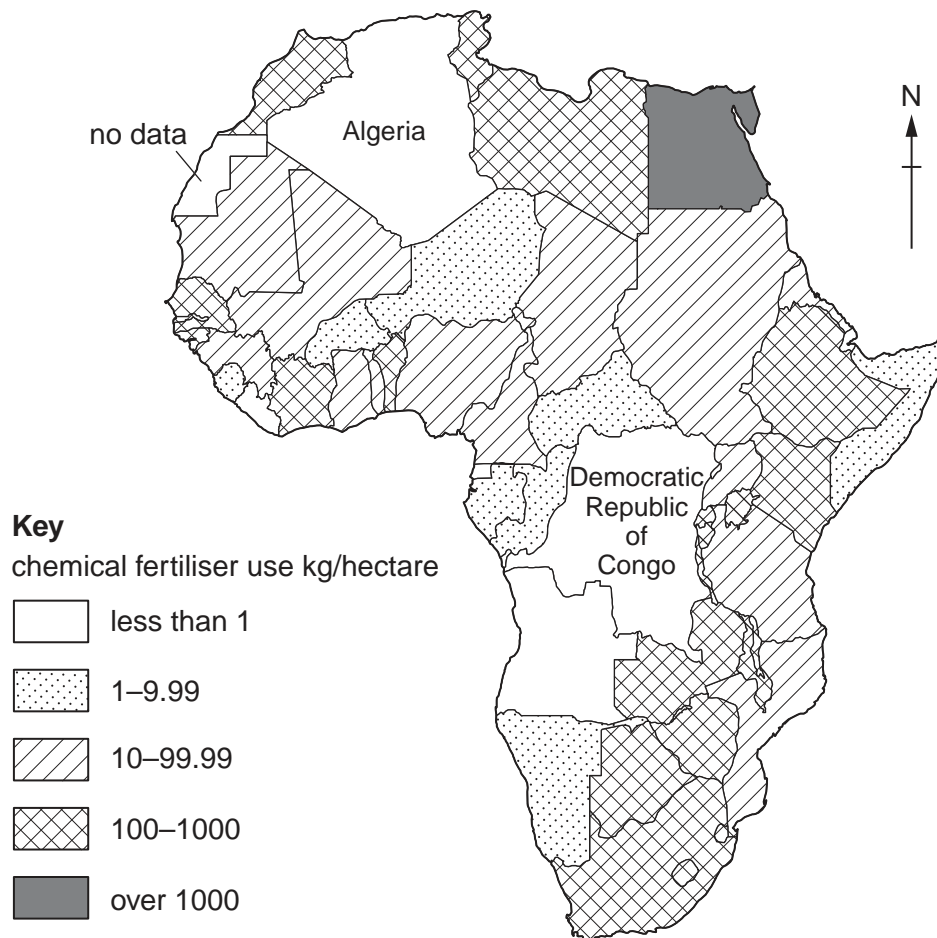


Fig. 4

(a) Complete Fig. 4 using the information below and the correct shading.

Country	kg/hectare
Algeria	130
Democratic Republic of Congo	16

[2]

(b) Circle the correct underlined words to complete the statements.

“A high use of fertiliser per hectare indicates an extensive / intensive farming system.

The country with the highest use of fertiliser per hectare is in the north-east / south of Africa.”

[2]

(c) Suggest advantages and disadvantages of using chemicals in food production on farms.

For
Examiner's
Use

Advantages

.....
.....
.....
.....
.....
.....
.....
.....

Disadvantages

.....
.....
.....
.....
.....
.....
.....
.....

[4]

[Total: 8 marks]

(ii) Suggest reasons for these differences.

For
Examiner's
Use

.....

.....

.....

.....

.....

.....

.....

.....

.....

..... [3]

[Total: 8 marks]

- 5 Study Table 2, which shows the GDP per person of eight countries. GDP per person gives an indication of level of development.

Table 2

Country	GDP per person (US\$)
Canada	31 263
Georgia	2 844
Haiti	1 844
Honduras	2 876
Indonesia	3 609
Italy	28 180
New Zealand	23 413
Norway	38 454

- (a) Use the information in Table 2 to rank the countries in order of their GDP per person.

High GDP per person Norway

Low GDP per person Haiti
 [1]

- (b) Study Fig. 6, opposite, which shows the employment structure for the same countries.

- (i) Use the data in Table 3 to complete the graph, by marking and labelling the positions of Honduras and Canada on Fig. 6.

Table 3

	% primary	% secondary	% tertiary
Honduras (LEDC)	50	20	30
Canada (MEDC)	4	33	63

[2]

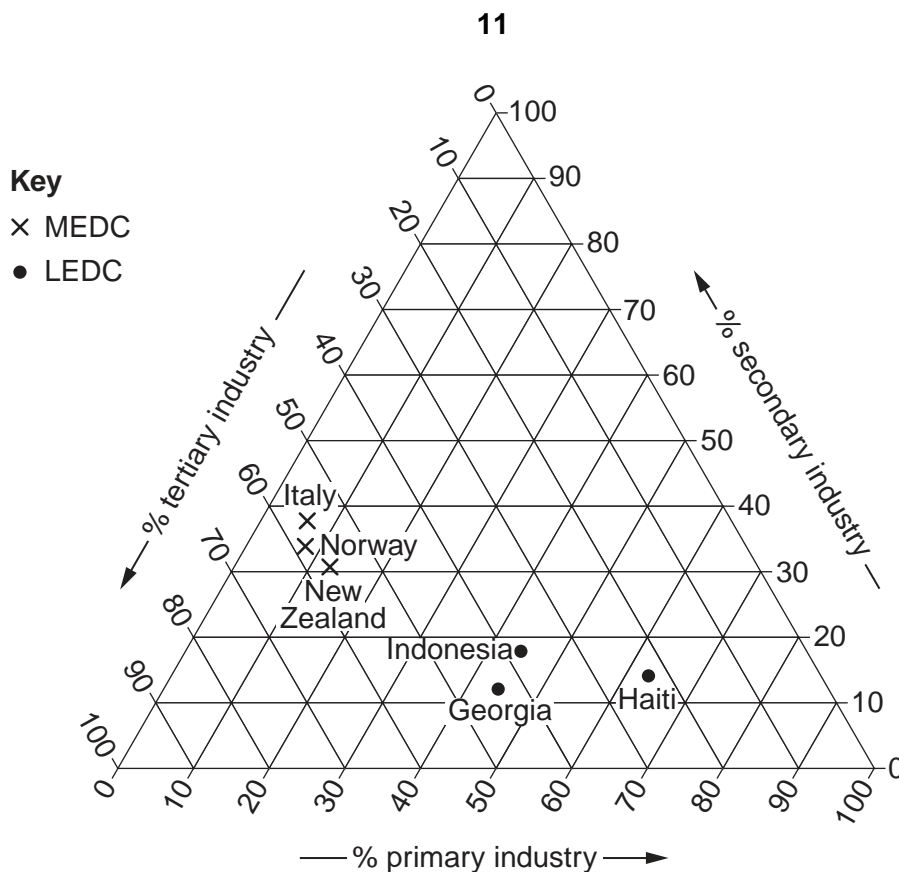


Fig. 6

- (ii) Use Fig. 6 to find the percentage employed in primary industry and tertiary industry in Indonesia and New Zealand.

	% Primary	% Tertiary	
Indonesia	
New Zealand	[2]

- (c) Describe the differences in employment structure between MEDCs and LEDCs shown in Fig. 6.

Differences

.....

.....

.....

.....

.....

.....

[3]

[Total: 8 marks]

- 6 Study Fig. 7, which shows the origin of the foreign-born population of the USA as a percentage.

For
Examiner's
Use

Origin of the foreign-born population of the USA

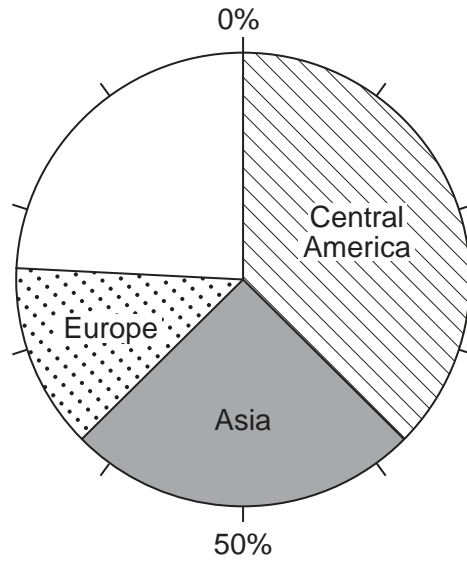


Fig. 7

- (a) Complete Fig. 7 using the information below:

Caribbean	10%
South America	6%
Other regions	8%

[2]

- (b) Which area has had the highest percentage of migrants to the USA?

..... [1]

(c) Study Fig. 8, which shows world regions.

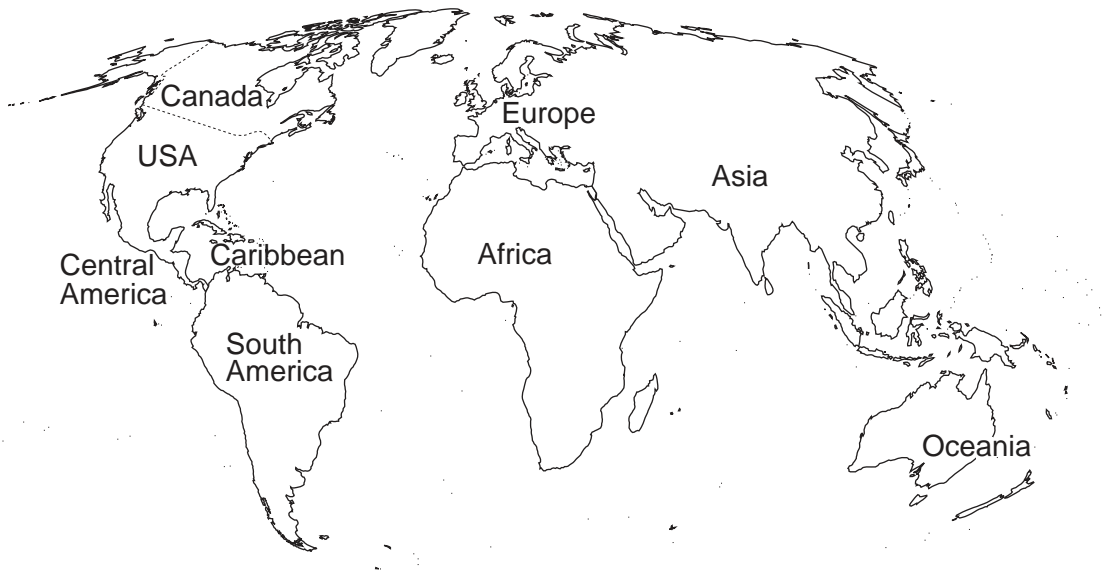


Fig. 8

Identify one region of the world labelled on Fig. 8 which would be included in 'Other regions' on Fig. 7.

.....
..... [1]

(d) Use Fig. 8 to help you to suggest reasons for the pattern of foreign-born population shown in Fig. 7.

.....
.....
.....
.....
.....
.....
.....
.....
..... [4]

[Total: 8 marks]

Section B

Answer **one** question in this section.

For
Examiner's
Use

- 7 A major impact of many people visiting countryside areas is the increase in footpath erosion. A lot of people walking over open ground presses down the soil and wears it away. Evidence used to indicate the amount of footpath erosion may involve factors such as:
- the percentage of bare ground
 - the height of vegetation
 - infiltration time (how long it takes water to soak into the soil)

Students who wanted to investigate the impact of this erosion decided to test the following hypotheses:

Hypothesis 1: *Footpath erosion decreases away from the centre of the footpath.*

Hypothesis 2: *Footpath erosion affects the rate at which water soaks into the soil.*

The students carried out their investigation on a path that was very popular for walkers. They chose three sites at varying distances from the car park.

These sites are shown on Fig. 9 (Insert).

At each site, the students carried out their investigation across a 10 metre transect. This is shown in Fig. 10.

Investigation site and equipment used

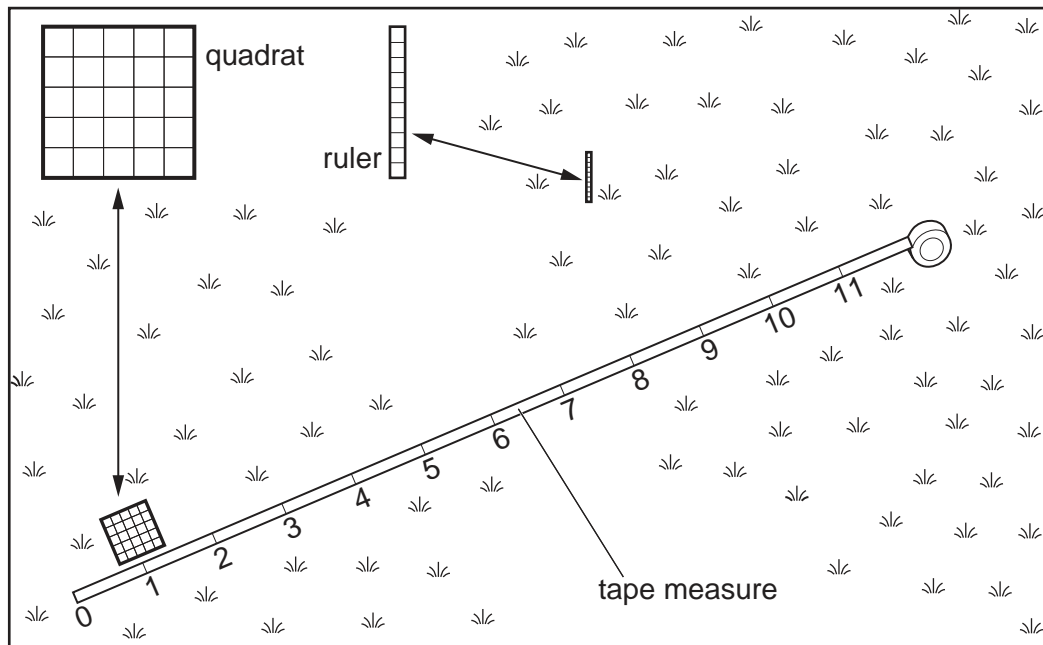


Fig. 10

- (iii) Use the results in Table 4 (Insert) to complete Fig. 12, to show the average height of vegetation at points 8, 9, 10 and 11 across the transect at Site A. [2]

For
Examiner's
Use



Fig. 12

- (iv) What conclusion could the students make about **Hypothesis 1**, *Footpath erosion decreases away from the centre of the footpath*? What evidence supports this conclusion?

.....

.....

.....

.....

.....

.....

.....

.....

[3]

- (b) (i) Next, the students investigated infiltration of water into the soil across the transect. Study Fig. 13, which shows the equipment used by the students to measure infiltration. Their results are shown in Table 5 (Insert).

For
Examiner's
Use

Equipment used to measure infiltration

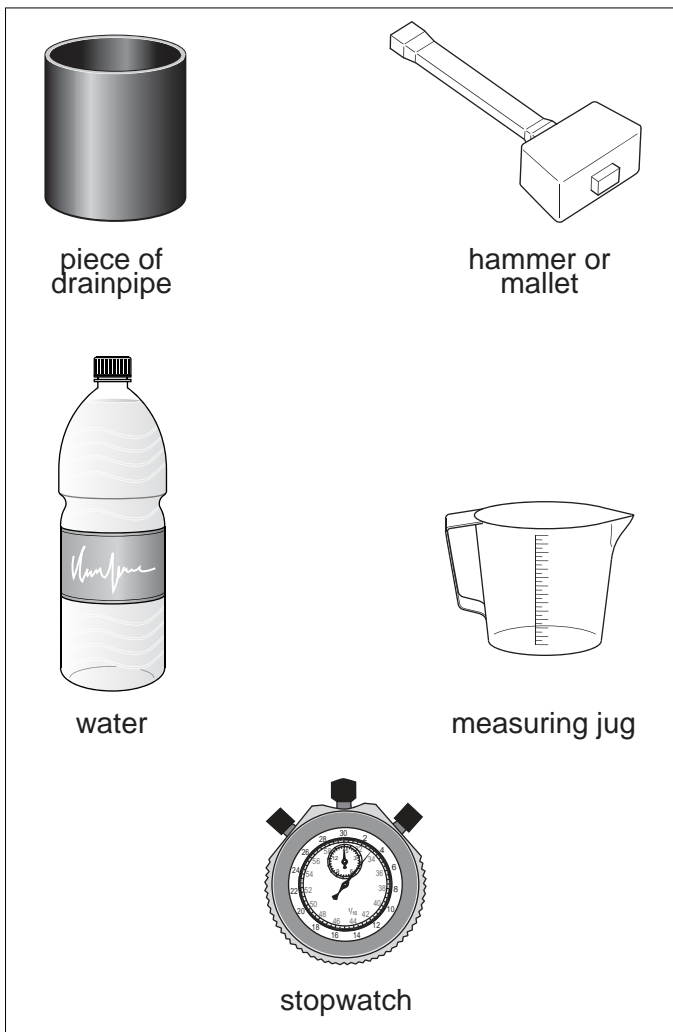


Fig. 13

Explain how they carried out this investigation.

.....

.....

.....

.....

.....

.....

..... [3]

- (ii) Use the results shown in Table 5 (Insert) to complete Fig. 14, to show the infiltration times at points 9, 10 and 11 across the transect. [2]

For
Examiner's
Use

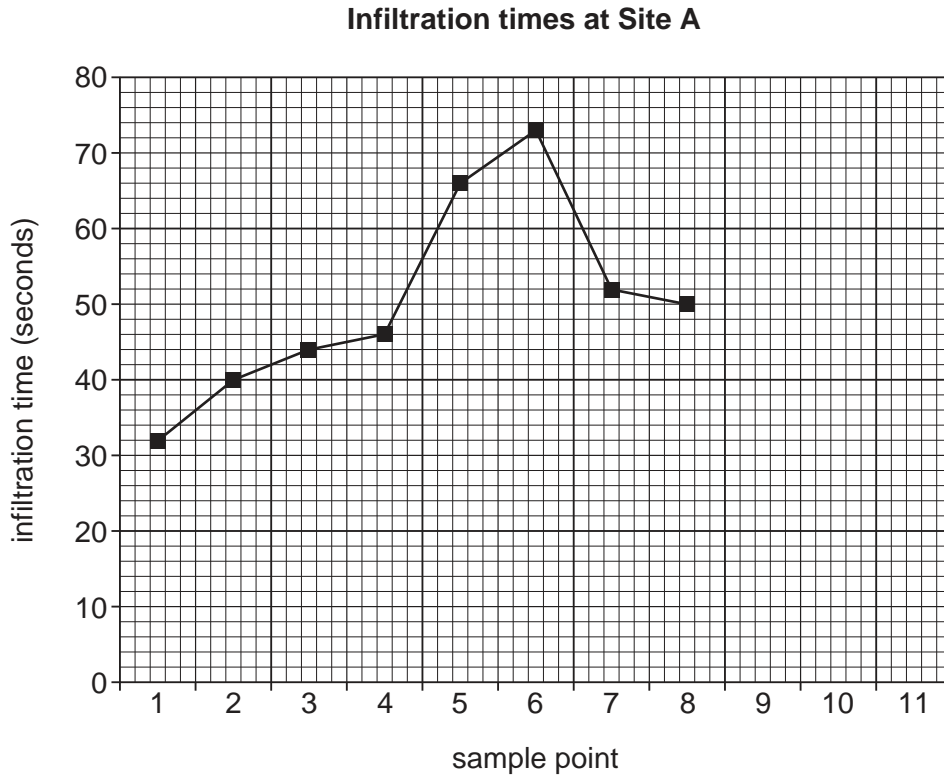


Fig. 14

- (iii) Look again at Table 4 (Insert) and Fig. 14. What is the relationship between the percentage of bare ground and the infiltration time at the sample points at Site A?

.....
 [1]

- (iv) Suggest why the infiltration time increases towards the centre of the path.

.....

 [2]

(c) The students did the same investigations at Sites B and C, shown on Fig. 9 (Insert). How and why might these results differ from those at Site A?

.....
.....
.....
.....
.....
.....
..... [3]

(d) In this investigation into footpath erosion, the students studied the amount of vegetation cover and the rate at which water soaks into the soil. How might the following suggestions have improved their investigation?

A pedestrian count

.....
.....

A questionnaire

.....
.....

Repeating the study at different times of the year

.....
..... [3]

(e) What techniques can be used to protect the natural environment in parts of the countryside which are popular with tourists?

.....
.....
.....
.....
.....
.....
.....
.....
..... [4]

[Total: 30 marks]

[Turn over

- 8 Students wanted to investigate the quality of the urban landscape in different parts of their town. To do this they decided to carry out an environmental survey, to find out if the quality of the environment varies between streets.

They decided to focus their investigation on the following hypotheses:

Hypothesis 1: *The quality of the environment is affected by the type of land use.*

Hypothesis 2: *The quality of the environment varies with distance from the town centre.*

The students selected 20 streets to survey. Their selection criteria were:

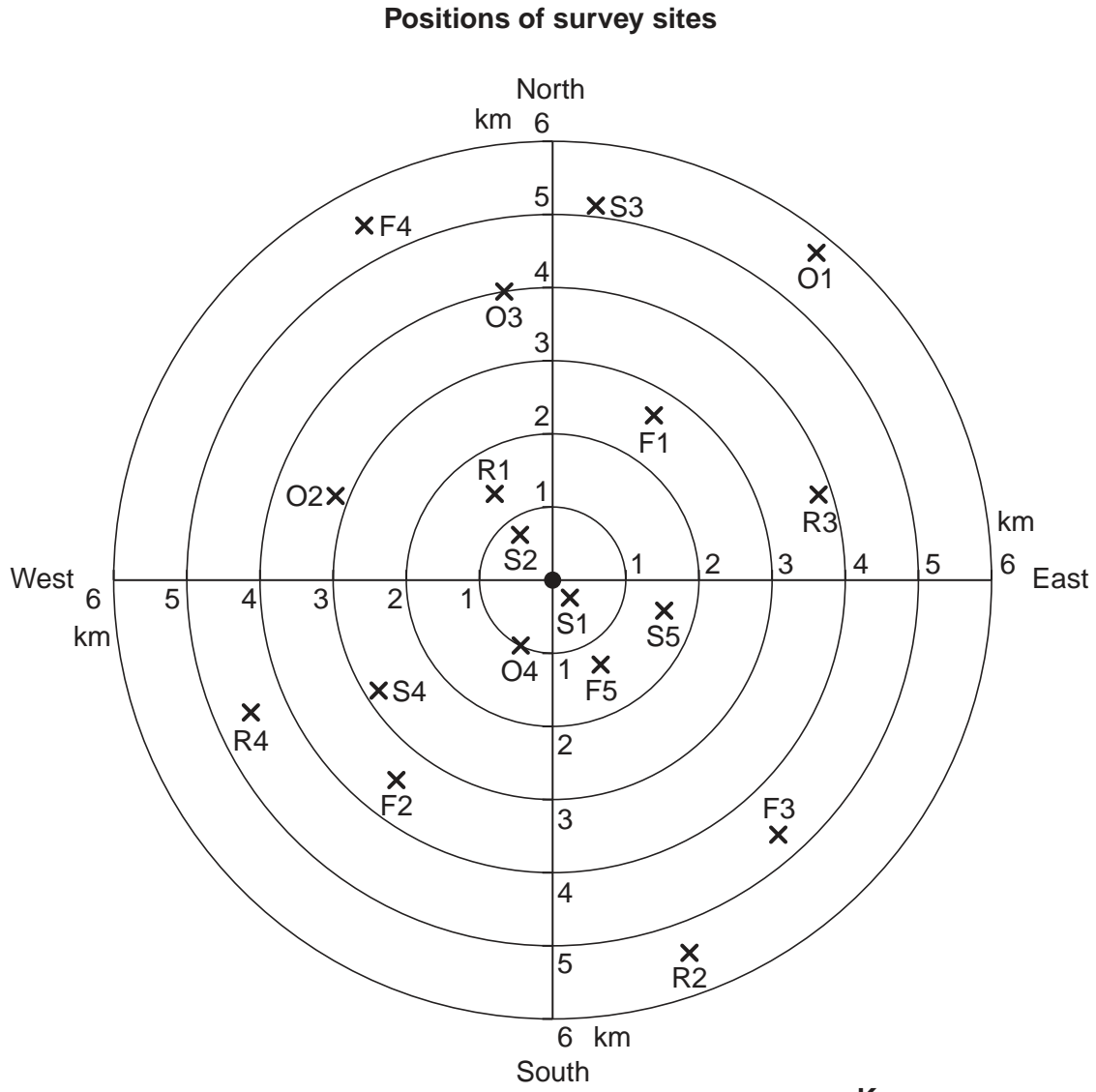
- the street must have one main land use
- the streets must be at different distances from the town centre

They decided to have four land use categories:

- residential
- industrial
- shopping
- open space

(a) The positions of the survey sites are shown on Fig. 15.

For
Examiner's
Use



Key

- town centre
- x position of survey point

Land uses:
 R residential
 F industrial
 S shopping
 O open space

Fig. 15

Complete Fig. 15 by marking on the position of the final two streets, using the information below.

Land use	Reference number	Distance from town centre (km)	Direction from town centre
residential	R5	2.0	north east
open space	O5	4.5	south west

[2]

[Turn over

- (b) The students produced an environmental quality reference sheet to use at each site. This is shown in Table 6.

For
Examiner's
Use

Table 6

Environmental quality reference sheet

Category	Description	Score
Litter	No litter	3
	Small amount of litter	2
	A lot of litter	1
	All kinds of litter scattered widely	0
Roads and pavements	Well maintained	3
	Slightly uneven	2
	Uneven	1
	Very poor condition	0
Trees, shrubs and grass	Well kept	3
	Badly kept or poor quality	2
	Damaged trees and shrubs, grass not cut	1
	Derelict and unplanted areas	0
Street furniture (lamp posts, telephone boxes, street lights, bins)	Well designed and in good condition	3
	Adequate provision, satisfactory condition	2
	Missing or inadequate	1
	Badly cared for or vandalised	0
Road signs	Well placed and visible	3
	Badly placed	2
	Confusing and cluttered	1
	Inadequate information	0
Traffic		3
		2
		1
		0
Noise	Low level noise	3
		2
	Frequent disturbing and distracting noise	1
		0

- (c) The students needed to record the results of their environmental quality survey. In Fig. 16, design a sheet which could be used to record their results for one street. [3]

For
Examiner's
Use

Environmental quality survey

Name of street

Fig. 16

- (d) The results of the environmental quality survey are shown in Table 7 (Insert).
- (i) Use these results to complete the dispersion graph, Fig. 17. Plot the environmental quality scores of the residential streets R1 and R4 and circle the median (middle) value for residential land use. [3]

Results of environmental quality survey

For
Examiner's
Use

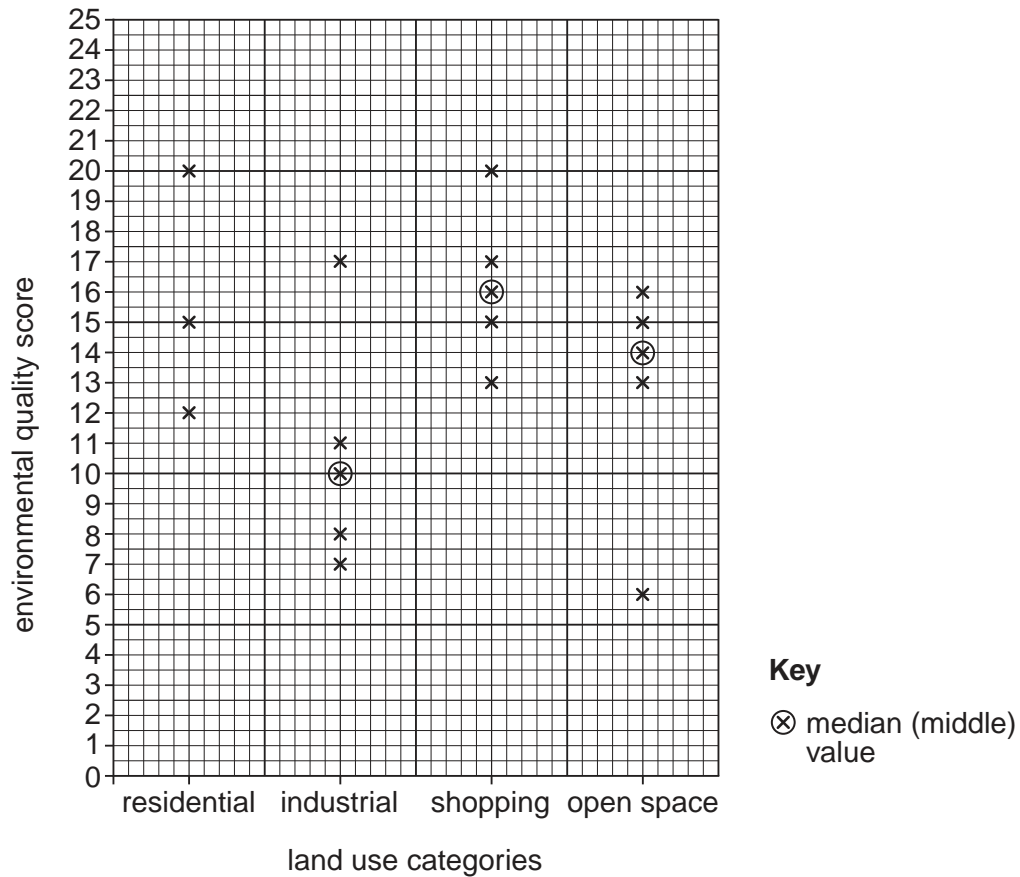


Fig. 17

(ii) In the space below, rank the four land use categories in order of their median (middle) score.

Rank	Land use category
High	
↑	
↓	
Low	

[1]

(iii) The students accepted **Hypothesis 1**, that 'The quality of the environment is affected by the type of land use'. Do you agree with them? Support your decision with evidence from Fig. 17.

.....

.....

.....

..... [2]

(f) Having completed the survey, the students were discussing the methods they had used with their teacher. They identified the following two things that they felt could have been improved:

- The environmental quality reference sheet Table 6
- The four land use categories they had identified (residential, industrial, shopping, open space)

What problems do you think the students might have identified about the environmental quality reference sheet and the four land use categories?

The environmental quality reference sheet

.....
.....
.....
.....

The four land use categories

.....
.....
.....
..... [4]

[Total: 30 marks]

BLANK PAGE

Copyright Acknowledgements:

Question 6 Fig. 7 © Luke J Larson; *The Foreign-Born Population in the United States*; US Census Bureau; 2003

Permission to reproduce items where third-party owned material protected by copyright is included has been sought and cleared where possible. Every reasonable effort has been made by the publisher (UCLES) to trace copyright holders, but if any items requiring clearance have unwittingly been included, the publisher will be pleased to make amends at the earliest possible opportunity.

University of Cambridge International Examinations is part of the Cambridge Assessment Group. Cambridge Assessment is the brand name of University of Cambridge Local Examinations Syndicate (UCLES), which is itself a department of the University of Cambridge.